
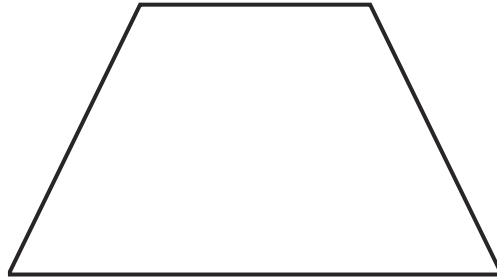
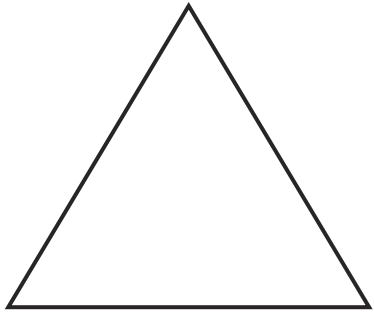


# Name the 2D Shape



Number of sides \_\_\_\_\_

Number of sides \_\_\_\_\_

Number of sides \_\_\_\_\_


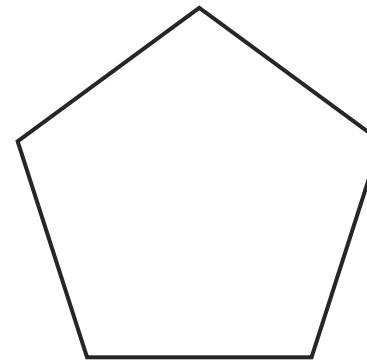
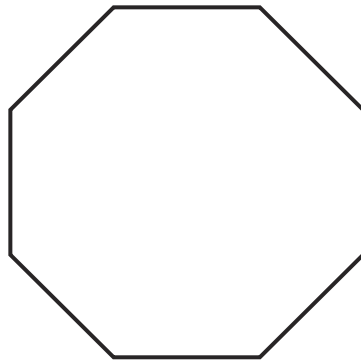
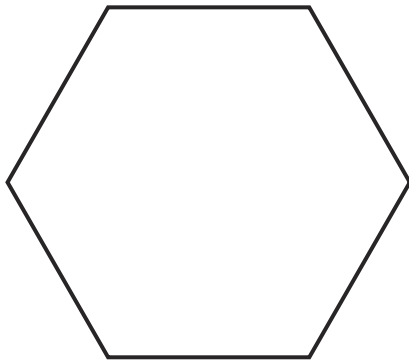
Number of sides \_\_\_\_\_

Name \_\_\_\_\_

Name \_\_\_\_\_

Name \_\_\_\_\_

Name \_\_\_\_\_



Number of sides \_\_\_\_\_

Number of sides \_\_\_\_\_

Number of sides \_\_\_\_\_

Number of sides \_\_\_\_\_

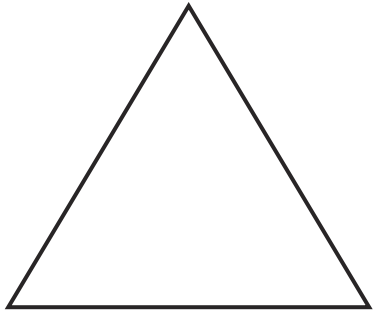
Name \_\_\_\_\_

Name \_\_\_\_\_

Name \_\_\_\_\_

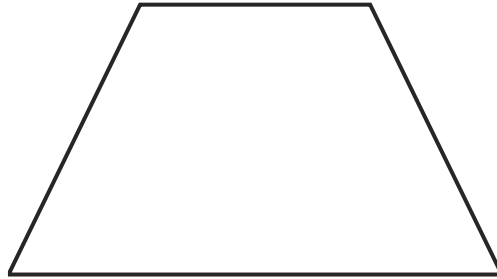
Name \_\_\_\_\_

# Name the 2D Shape - Answers



Number of sides 3

Name triangle/equilateral triangle




Number of sides 4

Name trapezium



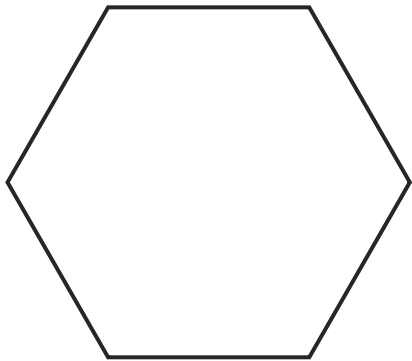
Number of sides 4

Name rectangle



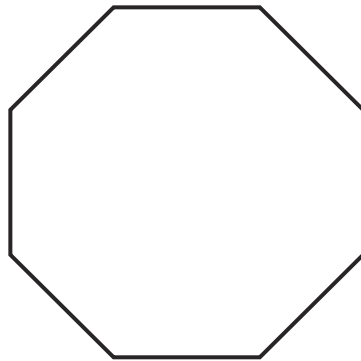
Number of sides 4

Name square



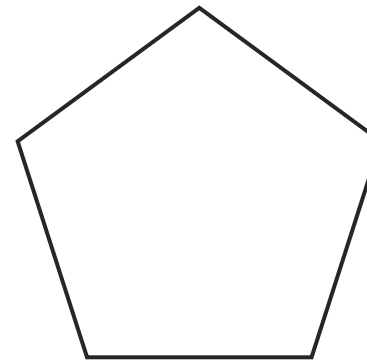
Number of sides 6

Name hexagon




Number of sides 8

Name octagon



Number of sides 5

Name pentagon



Number of sides 1

Name circle